

Subject:	Description of Task:	Resources:
English Spelling	<p>Have a game of battle ships using the spellings from this week.</p> <p>Practice your spellings using word pyramids like we do in class.</p> <p>How many words can you find that follow the spelling rule or pattern? Email your total to <a href="mailto:rgps@gateshead.gov.uk">rgps@gateshead.gov.uk</a> Who can find the most?</p>	Spelling worksheet and spelling list
English Comprehension	Read the text thoroughly and underline any words you do not understand. Use a dictionary or ask an adult to help explain any tricky words. Complete the questions once you have read the text. If you have time, you could create one or two more questions of your own.	'Carnival' reading comprehension worksheet
English Writing	<p>We have recently created our own information leaflet on 'plastic in the ocean'</p> <p>Using what you have learned, could you create your own information leaflet on a topic of your choice? It could be your favourite band, favourite sport, favourite celebrity...</p>	
English Punctuation & Grammar	Present tense and past verbs	CGP homework books pp. 26-27
English Reading	Read the next three chapters of your book. Create a comic strip summarising the first part of the story in 6 parts.	Copy of book Comic strip sheet.
Maths Key Fact	Practise your 6 Times Tables using TT Rockstars or Topmarks – try to do 15 minutes per day if you can.	Ipad or computer
Maths Revision 1	Work your way down the worksheet completing each mini activity.	Deepening understanding daily learning grid
Maths Written Method	Practice addition using the formal written method. There is an example on the worksheet if you need a reminder.	Addition worksheet
Other Subjects	See activity grid for choices	

Activity Grid for Foundation Subjects / Wider Curriculum Class: 4A Week: 2

*Select which activities you prefer to do or those that you have the available resources to do. You should complete at least 6.*

Science	History	Geography
<p>Digestion challenge! Ask for a snack at home and then, as you eat it, draw and label the route it takes through your digestive system! (Tip...large intestine, small intestine then out it pops!)</p>	<p><a href="http://myths.e2bn.org/">http://myths.e2bn.org/</a></p> <p>Listen to a myth or a legend (or both) from the website.</p> <p>Think about what the message of the story is and what can be learned by reading or listening to the story.</p>	<p><a href="https://www.bbc.co.uk/bitesize/topics/z849q6f/articles/z7w8pg8">https://www.bbc.co.uk/bitesize/topics/z849q6f/articles/z7w8pg8</a></p> <p>Visit the website to learn all about rivers. We have already started our rivers topic so you will already know quite a bit! Take the quiz at the end to see how much you have learned.</p>
Art / Design & Technology	PSHE	PE
<p>Design, draw and label a new playground for school. What would you have in it?</p>	<p>Make a poster to remind everyone in school about our key value of Respect.</p>	<p>Think back to our 'health related exercises' in PE.</p> <p>Use a timer and complete the following exercise for 30 seconds:</p> <ul style="list-style-type: none"> <li>-Star jumps</li> <li>-squats</li> <li>- running on the spot</li> <li>- sit ups</li> </ul> <p>How many times can you complete the circuit? Can you beat your score tomorrow?</p>
Quiz Master	What if?	In the World...
<p>Capital Cities Quiz! Find out the capital cities for 10 countries around the world and set an adult the challenge of getting them all right! If they score less than 8, you win!</p>	<p>What if you could be Mrs Clarke for the day... What 3 changes would you make and why?</p>	<p>Do you have a pet or know someone who does? Create a factfile about how to look after the pet – include a photo or picture! You can bring them in when we come back to school and share with your class!</p>

# Activity: Wordships - (it is like Battleships)

## Game instructions:

Each player needs a game board. Before the game can begin, each player must secretly choose 6 rectangles in which to write the 6 spelling words. Player 1 begins by giving Player 2 a co-ordinate, e.g. B4. If this co-ordinate finds a 'wordship' on Player 2's board, Player 2 must say the word and Player 1 must spell it. If Player 1 spells it correctly, they sink Player 2's 'wordship'. However, if the spelling is incorrect the 'wordship' remains afloat. The aim of the game is to sink all your opposing player's 'wordships'.

	1	2	3	4	5
A					
B					
C					
D					
E					

	1	2	3	4	5
A					
B					
C					
D					
E					

# Carnival

There are many festivals and celebrations around the world throughout the year. However, carnival is one of the most famous and flamboyant festivities. Many carnivals take place in the build-up to the religious season of Lent. Lent happens during the six weeks before Easter Sunday, when people prepare for the death and resurrection of Jesus. Therefore, the majority of carnivals take place during February. Lent is a time when, traditionally, people give up something that they will find difficult. This could be a type of food or a bad habit that they want to try to stop.

Carnivals differ from place to place as many areas focus on their own traditions and pastimes and are often heavily influenced by the culture of their country. In most countries, carnival is often characterized by masks, flamboyant costumes, music and colourful floats and parades. Some carnivals have special trinkets or symbols. In New Orleans, they have sweet and very colourful cakes called King Cakes as a symbol of their carnival (Mardi Gras).



The most famous and largest carnival in the world takes place in Rio de Janeiro, Brazil. Carnival in Brazil is not just a fun celebration, but a chance to experience the diverse culture of the country. Brazil is often referred to as a 'melting-pot' of culture. There are many European, African and American influences in Brazilian society. Carnival epitomises the Brazilian way of life and their way of thinking. There are many parties, which take place throughout the day and during the night, celebrating the songs, music and dances, typical of Brazilian culture. The most popular form of music and dancing at the Rio carnival is samba, a style unique to Brazil, which is often played on drums with traditional dancing. The 'Sambódromo' is an avenue, specially made to host carnival in Rio. Every year, thousands of people go to this area to celebrate carnival, including over 500,000 foreign visitors!



Although carnival is linked to religious faith and traditions, it is a time of fun, excess and flamboyance, enjoyed by millions across the world.

### Carnivals in Europe

There are several carnivals in Europe, for example:

**Cadiz** is where the largest Spanish carnival takes place. It is heavily influenced by local traditions along with current and political events. Like Rio, there are parades and floats with lots of music.

**Nice**, in France, is a carnival that is heavily influenced by Catholic traditions. People indulge in lots of rich food in the build up to Lent. One of the most popular street celebrations is the Battle of the Flowers, where there are lots of floats and costumes, brimming with plants and flowers.

**Cologne** is the principal carnival city in Germany. The carnival season actually begins in November here and culminates the week before (and including) Shrove Tuesday. There are lots of parades and people dress up - even at work and school. It is one of Germany's most important cultural events.



# Questions

1. a) When do most carnivals take place?

---

b) Why do you think this time of year is chosen?

---

2. What does the word flamboyant mean?

---

3. Where do they celebrate Mardi Gras and what is an important symbol of this carnival?

---

4. Why do you think Brazil is sometimes referred to as a 'melting-pot' of culture?

---

5. Why is carnival so important to Brazil?

---

6. What is different about carnival season in Germany and most other countries?

---

7. Why do you think carnivals are so popular across the world and attract so many visitors?

---

8. Why do you think people give something up for Lent?

---

9. The text says that carnivals are often characterised by masks, flamboyant costumes, music and colourful floats and parades. What does this mean?

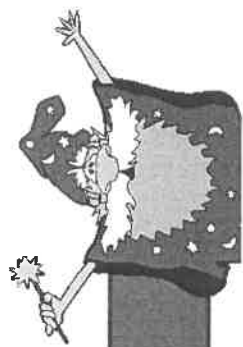
---

10. Imagine you have attended a carnival. Describe in three paragraphs, what you have seen, heard and experienced. Use as much detail as possible.


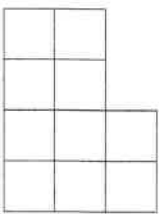



---

---

Name of book:



# Year Four Securing Skills Sheet 1

Task:	Manday	Tuesday	Wednesday	Thursday	Friday
Write in figures:	One thousand five hundred and seventy two	Two thousand eight hundred and thirty nine	Four thousand and sixty eight	Three thousand one hundred and twenty	Five thousand four hundred and fifty one
Subtract 1000	2604	5782	3419	8525	1273
Calculate the area of these shapes in $\text{cm}^2$					



Use < and > to compare these numbers.	6.1	6.5	3 4	34	1.7	1.2	836	863	3.5	5.3
What does the 7 represent in place value?	1724		1637		2476		73 2		376	
Round to the nearest 10	127		241		398		103		2 2	



# Adding 4-Digit Numbers with Regrouping

LO: I can add 4-digit numbers with regrouping.

$$\begin{array}{r} 1 \quad 4078 \\ + 7806 \\ \hline 11884 \\ \hline 1 \end{array}$$

$$\begin{array}{r} 2 \quad 3020 \\ + 7033 \\ \hline 10053 \\ \hline \end{array}$$

$$\begin{array}{r} 3 \quad 8389 \\ + 2094 \\ \hline \\ \hline \end{array}$$

$$\begin{array}{r} 4 \quad 1938 \\ + 8398 \\ \hline \\ \hline \end{array}$$

$$\begin{array}{r} 5 \quad 8784 \\ + 9969 \\ \hline \\ \hline \end{array}$$

$$\begin{array}{r} 6 \quad 8580 \\ + 1887 \\ \hline \\ \hline \end{array}$$

$$\begin{array}{r} 7 \quad 9771 \\ + 8489 \\ \hline \\ \hline \end{array}$$

$$\begin{array}{r} 8 \quad 5602 \\ + 9250 \\ \hline \\ \hline \end{array}$$

$$\begin{array}{r} 9 \quad 2851 \\ + 2330 \\ \hline \\ \hline \end{array}$$

$$\begin{array}{r} 10 \quad 8976 \\ + 7249 \\ \hline \\ \hline \end{array}$$

$$\begin{array}{r} 11 \quad 6942 \\ + 3220 \\ \hline \\ \hline \end{array}$$

$$\begin{array}{r} 12 \quad 7238 \\ + 5733 \\ \hline \\ \hline \end{array}$$

$$\begin{array}{r} 13 \quad 4265 \\ + 8270 \\ \hline \\ \hline \end{array}$$

$$\begin{array}{r} 14 \quad 8811 \\ + 2787 \\ \hline \\ \hline \end{array}$$

$$\begin{array}{r} 15 \quad 1899 \\ + 8179 \\ \hline \\ \hline \end{array}$$

$$\begin{array}{r} 16 \quad 6073 \\ + 6379 \\ \hline \\ \hline \end{array}$$

**Challenge:**

$$\begin{array}{r} 1 \quad 2\_32 \\ + 31\_2 \\ \hline \_28\_ \\ \hline \end{array}$$

$$\begin{array}{r} 2 \quad 96\_ \\ + 6\_80 \\ \hline \_ \_ 197 \\ \hline \end{array}$$

$$\begin{array}{r} 3 \quad 25\_7 \\ + \_39\_ \\ \hline 7\_65 \\ \hline \end{array}$$

$$\begin{array}{r} 4 \quad 8\_2\_ \\ + \_060 \\ \hline \_08\_1 \\ \hline \end{array}$$